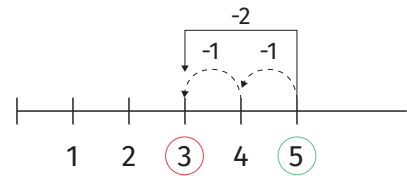


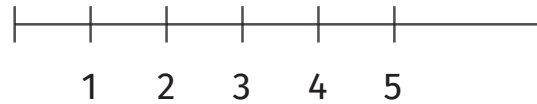


Izračunaj koristeći brojevnu crtu.

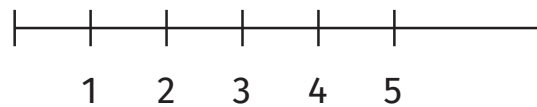
$$5 - 2 = \boxed{3}$$



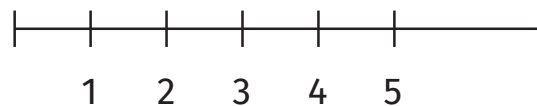
$$5 - 3 = \boxed{}$$



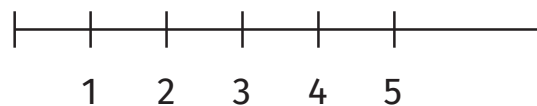
$$3 - 1 = \boxed{}$$



$$4 - 2 = \boxed{}$$



$$5 - 2 = \boxed{}$$



$$4 - 1 = \boxed{}$$

