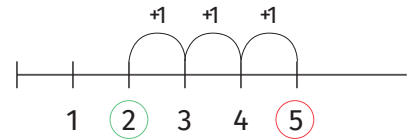


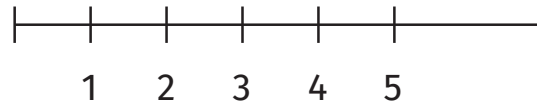


Izračunaj koristeći brojevnju crtu.

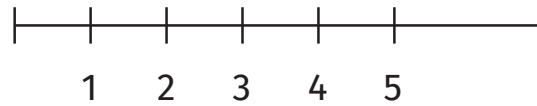
$$2 + 3 = 5$$



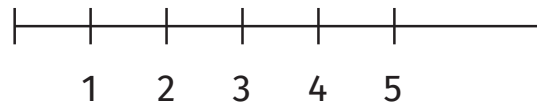
$$\square + \square = \square$$



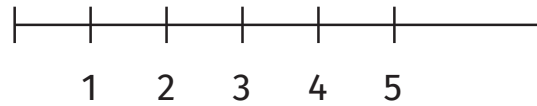
$$\square + \square = \square$$



$$\square + \square = \square$$



$$\square + \square = \square$$



$$\square + \square = \square$$

