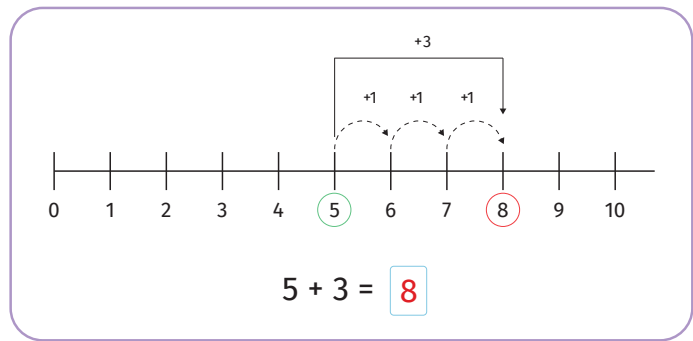
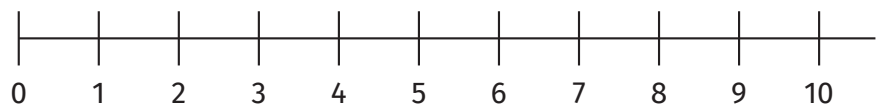




Izračunaj koristeći brojevnu crtu.



$6 + 2 = \square$



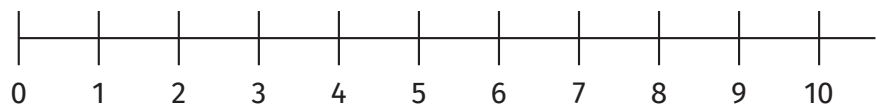
$5 + 4 = \square$



$7 + 3 = \square$



$8 + 1 = \square$



$3 + 6 = \square$

