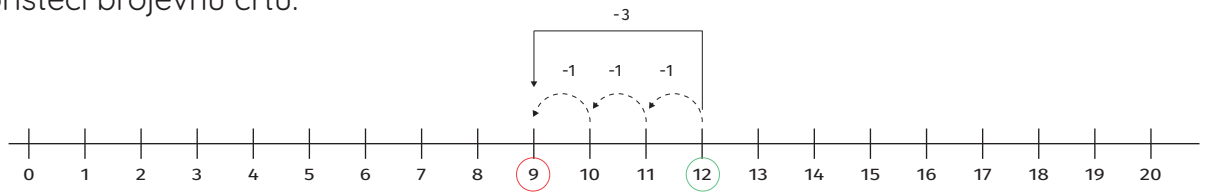


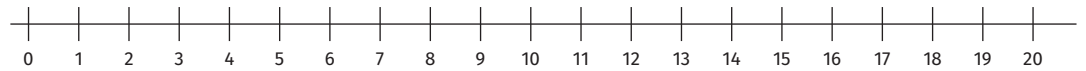


Izračunaj koristeći brojevnu crtu.

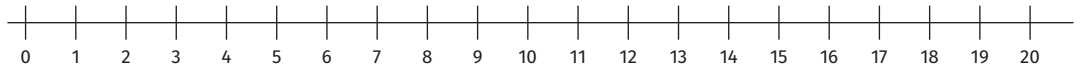


$$12 - 3 = \boxed{9}$$

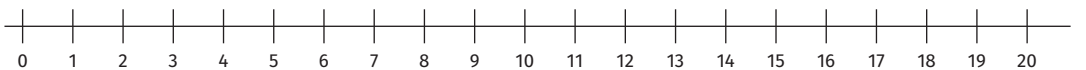
$16 - 4 = \boxed{}$



$19 - 2 = \boxed{}$



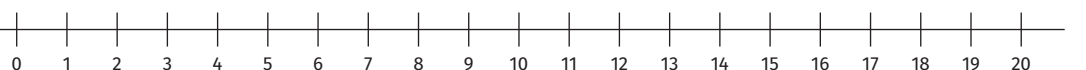
$12 - 5 = \boxed{}$



$11 - 3 = \boxed{}$



$17 - 7 = \boxed{}$



$13 - 6 = \boxed{}$

