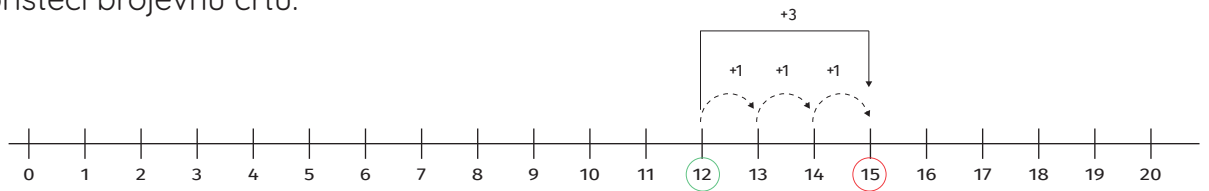


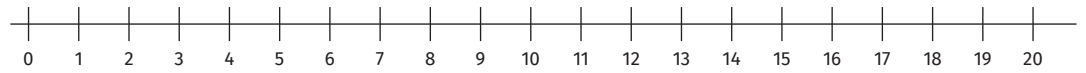


Izračunaj koristeći brojevnu crtu.

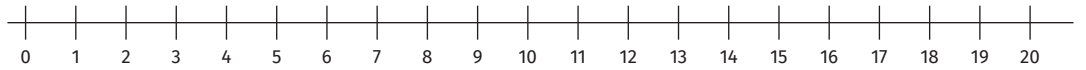


$$12 + 3 = 15$$

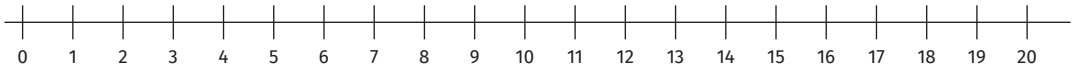
$6 + 5 = \square$



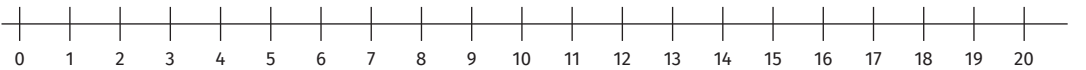
$9 + 8 = \square$



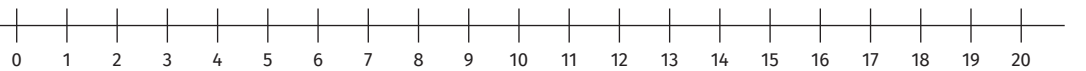
$7 + 6 = \square$



$8 + 7 = \square$



$9 + 9 = \square$



$5 + 7 = \square$

