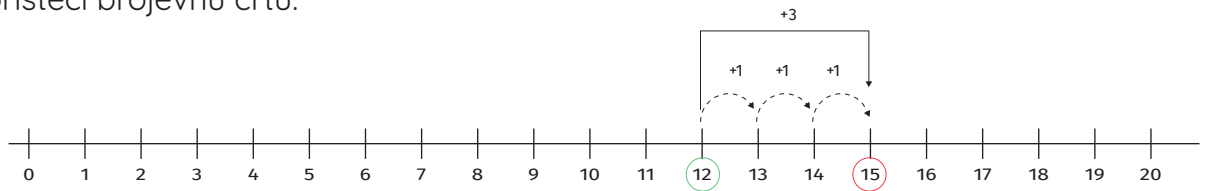


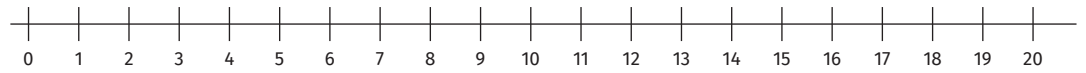


Izračunaj koristeći brojevnu crtu.

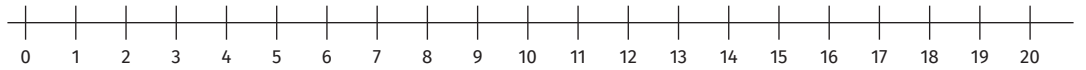


$$12 + 3 = 15$$

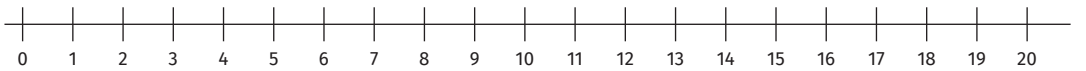
$11 + 4 = \square$



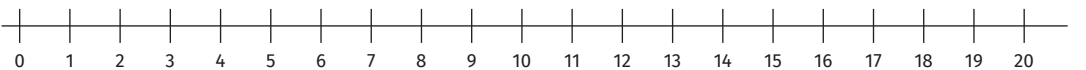
$15 + 4 = \square$



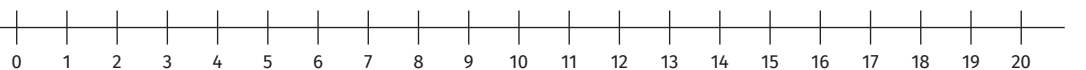
$14 + 6 = \square$



$10 + 7 = \square$



$12 + 6 = \square$



$13 + 7 = \square$

